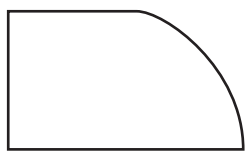



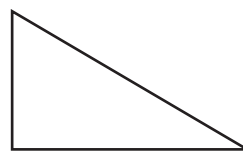
2 Look at the shapes below.



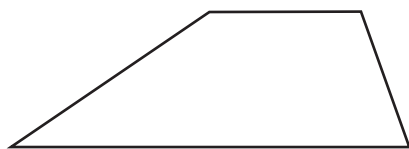
A



B



C



D



E

Which shape has at least one line of symmetry?

Answer _____

Draw all the lines of symmetry in the shape you selected.